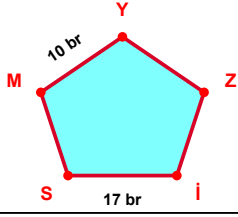
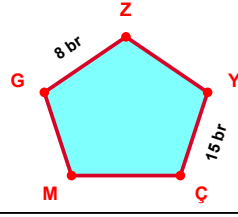


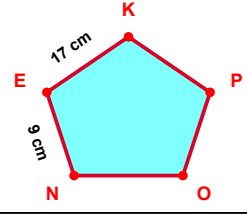
SORU: Aşağıdaki şekillerde verilen, kenar uzunlukları farklarını bulunuz.



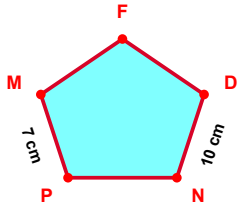
$$|SI| - |YM| = \dots\dots$$



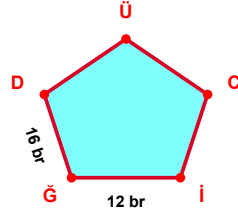
$$|ÇY| - |ZG| = \dots\dots$$



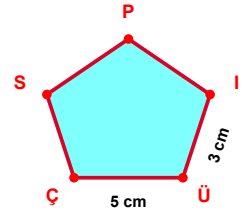
$$|KE| - |EN| = \dots\dots$$



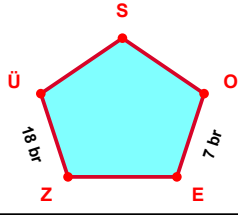
$$|ND| - |MP| = \dots\dots$$



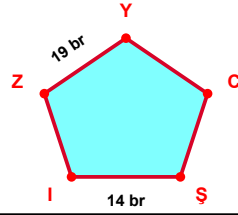
$$|DĞ| - |İÇ| = \dots\dots$$



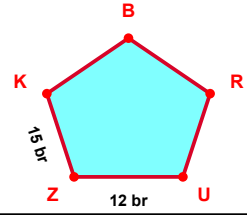
$$|ÇÜ| - |İÜ| = \dots\dots$$



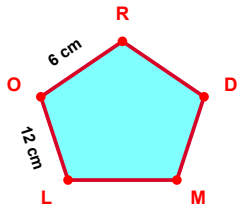
$$|ÜZ| - |EO| = \dots\dots$$



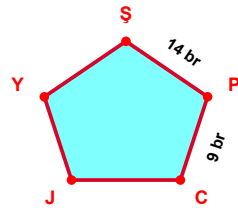
$$|YZ| - |İŞ| = \dots\dots$$



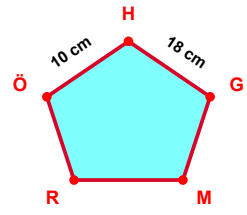
$$|KZ| - |ZU| = \dots\dots$$



$$|OL| - |RO| = \dots\dots$$

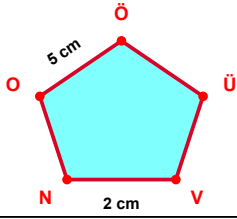


$$|PŞ| - |CP| = \dots\dots$$

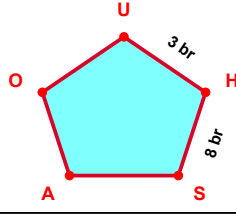


$$|GH| - |HÖ| = \dots\dots$$

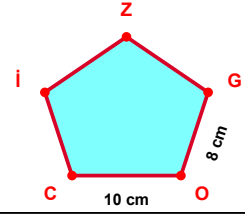
SORU: Aşağıdaki şekillerde verilen, kenar uzunlukları farklarını bulunuz.



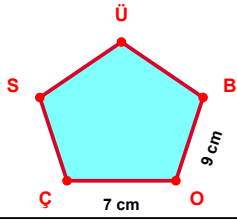
$$|ÖO| - |NV| = \dots\dots$$



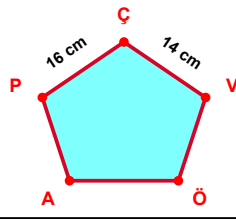
$$|SH| - |HU| = \dots\dots$$



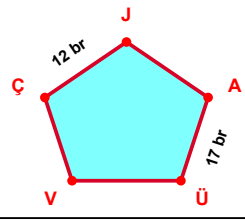
$$|CO| - |OG| = \dots\dots$$



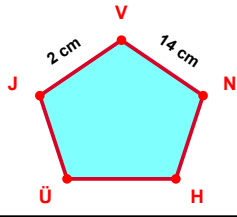
$$|OB| - |ÇO| = \dots\dots$$



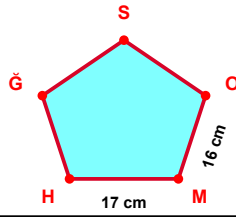
$$|ÇP| - |VC| = \dots\dots$$



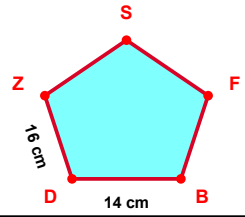
$$|ÜA| - |JC| = \dots\dots$$



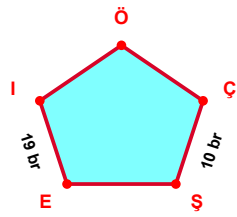
$$|NV| - |VJ| = \dots\dots$$



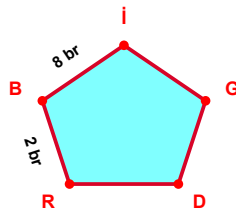
$$|HM| - |MO| = \dots\dots$$



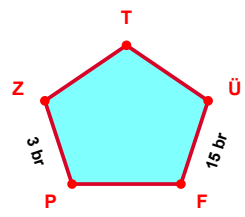
$$|ZD| - |DB| = \dots\dots$$



$$|İE| - |ŞÇ| = \dots\dots$$



$$|İB| - |BR| = \dots\dots$$



$$|FÜ| - |ZP| = \dots\dots$$

SÜREÇ ODAKLI DEĞERLENDİRME ÖLÇEĞİ

Doğru Sayısı: / 24

Öğretmen ilgili kutucuğu işaretler.

Geliştirilmeli (0-8)

İyi (9-14)

Çok İyi (15-20)

Mükemmel (21-24)

☐
☐
☐
☐

Hazırlayan:

Bu bölüme sınıfınızın ilgili kazanıma yönelik genel durumuna ilişkin gözlem ve izlenimlerinizi, öğrencilerinizin bu kazanımla ilgili öğrenme eksikliklerini ve bu eksikliklerin giderilmesi amacıyla yaptığınız/yapmayı planladığınız faaliyetleri not edebilirsiniz.

No	Adı - Soyadı	Toplam Puan	Değerlendirme
1			
2			
3			
4			
5			
6			
7			
8			
9			
10			
11			
12			
13			
14			
15			
16			
17			
18			
19			
20			
21			
22			
23			
24			
25			
26			
27			
28			
29			
30			
31			
32			
33			
34			
35			

Hazırlayan: